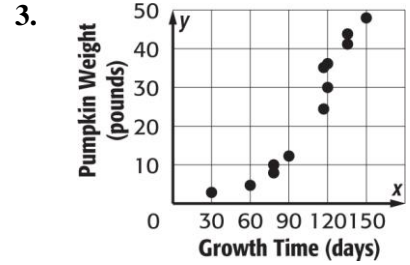
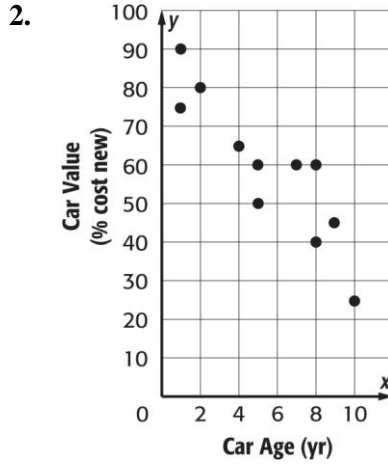
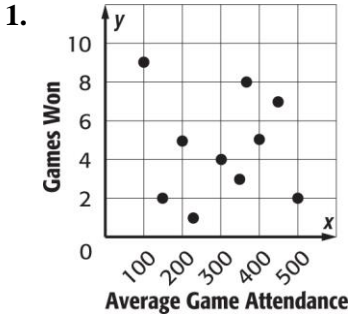


LT15 re-teaching **Scatter Plots**

Interpret each scatter plot.



4. Write the association for the scatterplot in Question #2 above

5. **DONATIONS** Construct a scatter plot of the number of cars donated to a local charity over the past five years since 2007. Then draw the line of best fit on the graph (hint: use (0,7) on your trend line)

Years Since 2007	0	1	2	3	4	5
Number of Cars	7	14	21	30	28	35

